



HOME LINK  
5•5**Domino Addition**


**Family Note** Children continue practicing basic addition facts. Notice that we are emphasizing +0, +1, and double facts like 6 + 6.


*Please return this Home Link to school tomorrow.*


Add.

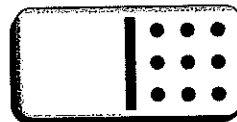
1.   $\begin{array}{r} 4 \\ + 4 \\ \hline \end{array}$

2.   $\begin{array}{r} 0 \\ + 6 \\ \hline \end{array}$


3.   $\begin{array}{r} \phantom{0} \\ = 2 + 1 \end{array}$


4.   $1 + 5 = \underline{\quad}$


5.   $3 + 3 = \underline{\quad}$

6.   $\underline{\quad} = 0 + 9$

Fill in the missing dots and the missing numbers.

7.   $\begin{array}{r} 4 \\ + 0 \\ \hline \end{array}$

8.   $\begin{array}{r} 8 \\ + \phantom{0} \\ \hline 16 \end{array}$

9.   $5 + \underline{\quad} = 10$

**Practice**

10. Circle the ones place.

44

31

17

69